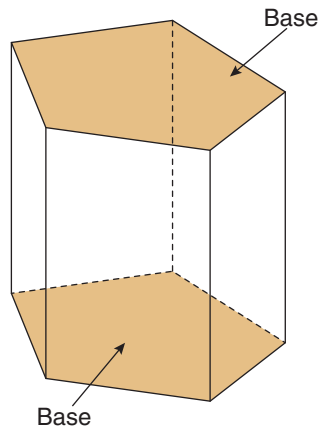


The names for pyramids and prisms are determined by the shape of their base.

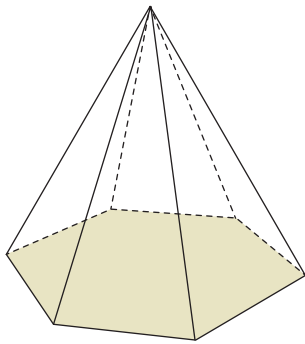
Example 1

The object shown below is a right pentagonal prism. The shape of its base is a pentagon (5 sides), and its faces are rectangles.



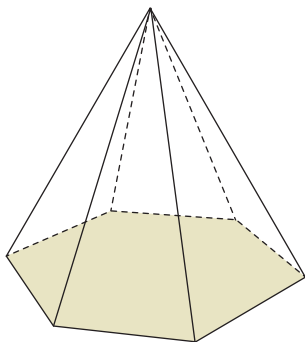
Check Up

What is this object called?



Compare your answer.

What is this object called?



The object shown is a **right hexagonal pyramid**. The shape of its base is a hexagon (6 sides) and its faces are triangles.