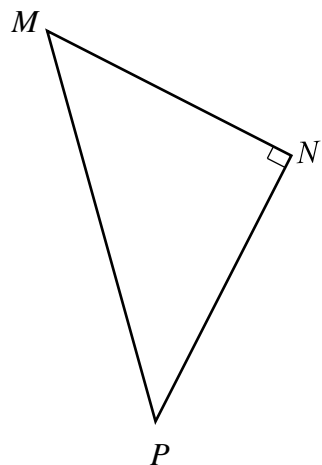
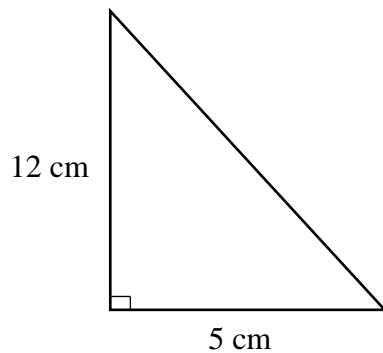


Solving for the Hypotenuse Practice

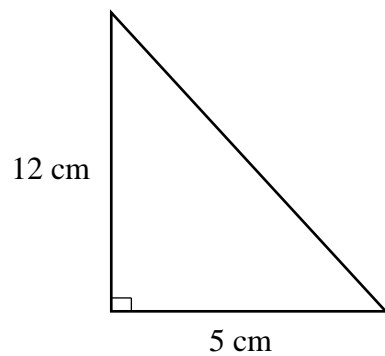
1. Rewrite the Pythagorean Theorem for the triangle shown.



2. Determine the length of the hypotenuse in the triangle shown.



Step 1: Label the sides of the triangle.



Step 2: Write the formula, substitute known values, and solve.

3. Determine the length of the hypotenuse in the triangle shown.

