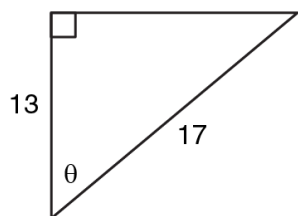
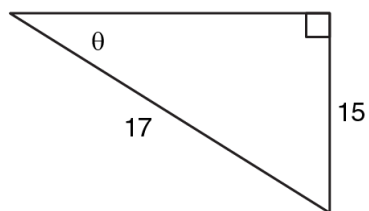


**Solving for Unknown Angle Measures Using Sine or Cosine**

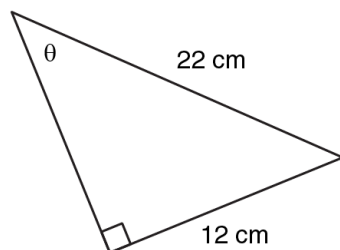
1. Determine the measure of angle  $\theta$ , to the nearest degree.



2. Determine the measure of angle  $\theta$ , to the nearest degree.



3. Determine the measure of angle  $\theta$ , to the nearest degree.



4. Determine the measure of angle  $\theta$ , to the nearest degree.

